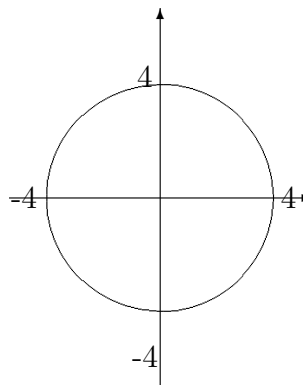
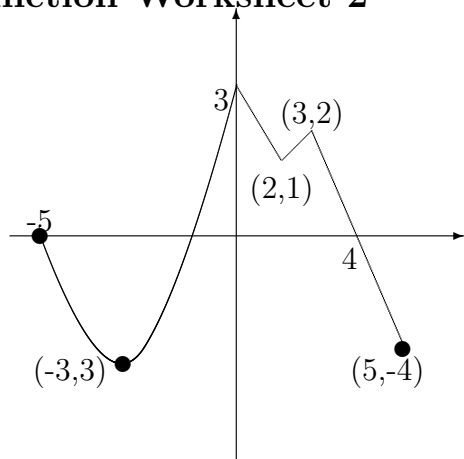


# Function Worksheet 2

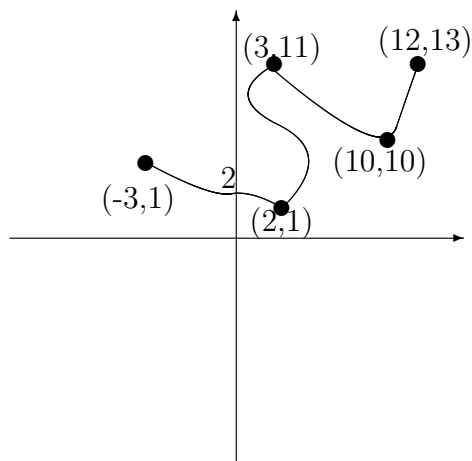
Name:

Per:



1.

- (a) Is this a function?
- (b) Domain:
- (c) Range:
- (d) Increasing:
- (e) Decreasing:

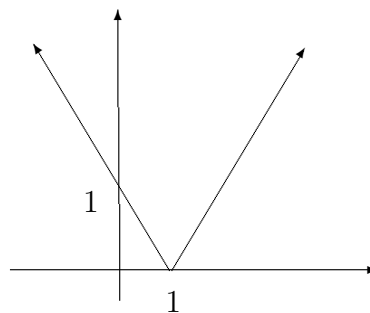


2.

- (a) Is this a function?
- (b) Domain:
- (c) Range:
- (d) Increasing:
- (e) Decreasing:

3.

- (a) Is this a function?
- (b) Domain:
- (c) Range:
- (d) Increasing:
- (e) Decreasing:



4.

- (a) Is this a function?
- (b) Domain:
- (c) Range:
- (d) Increasing:
- (e) Decreasing: